

Direction : Make a choice of the correct tense in the following sentences [Q. No.1–
Q. No. 2]

1. If I — what he wanted, I — not permit this.
- (A) know, will (B) know, would
(C) knew, will (D) knew, would
2. The train — left before I — the station.
- (A) have, reached (B) had, reached
(C) had, reach (D) has, reached

Direction : Choose the correct preposition [Q. No. 3 – Q. No. 9].

3. Riya is remarkable — her skill — music.
- (A) for, in (B) in, for
(C) for, for (D) for, on
4. The belt was made — ordinary leather, but studded — jewels.
- (A) with, with (B) up, with
(C) of, with (D) of, for
5. He lives — a foreign country, cut — from his kith and kin.
- (A) at, up (B) in, out
(C) in, off (D) at, out

6. He called — me — help.
- (A) at, for (B) out, for
(C) on, for (D) to, to
7. He failed — put across his idea — the committee.
- (A) to, for (B) to, to
(C) to, in (D) for, in
8. He will make — his loss — six months.
- (A) out, in (B) up, for
(C) up, on (D) up, in
9. He has bought — a new edition — his book.
- (A) out, in (B) up, of
(C) out, with (D) out, of

Direction : Choose the one that think appropriate [Q. No. 10]

10. I have always found him a most — fellow.
- (A) amiable (B) amicable
(C) alien (D) applicable

Direction : In each of the following question, a sentence has been given in direct/indirect speech. Out of suggested alternatives select the one which best expresses the same sentence in indirect / direct speech [Q. No. 11 – Q. No. 15].

11. He said, "I should go there."
- (A) He said that he should go there.
 - (B) He said that I should go there.
 - (C) He wanted you to go there.
 - (D) He said that he wanted me to go there.
12. She advised me not to worry.
- (A) She told, "No worry."
 - (B) She advised, "Not worry."
 - (C) She said to me "Don't worry."
 - (D) She said, "Please don't worry."
13. He asked me why I had failed.
- (A) He said, "Why I have failed" ?
 - (B) He said to me, "Why had you failed" ?
 - (C) He said to me, "Why have you failed" ?
 - (D) He said to me, "Why had I failed" ?
14. He said that he was sorry.
- (A) He said, "I am sorry".
 - (B) He said, "He is sorry".
 - (C) He said to me, "He was sorry".
 - (D) He said to me, "I was sorry".

15. The father asked his son whether he had done well in the examination.
- (A) The father said, "Had you done well in the examination?"
 - (B) The father said to his son, "Have you done well in the examination?"
 - (C) The father said, "You had done well in the examination."
 - (D) The father said, "You have done well in the examination."

Direction : In the following questions four alternatives are given for idioms/phrases underlined in the sentence. Choose the alternatives which best expresses the meaning of the idioms/phrase [Q. No. 16 – Q. No. 19].

16. I am afraid he is burning the candle at both ends and ruining his life.
- (A) wasting his money
 - (B) losing his hope
 - (C) losing his objectives
 - (D) overtaxing his energies
17. He is proud of his blue blood.
- (A) Belonging to low class society
 - (B) Give complain in written
 - (C) Member of a well-known club
 - (D) Member of high-class society
18. Of late, he has become popular.
- (A) suddenly
 - (B) then
 - (C) now
 - (D) lately
19. His performance was of milk and water kind.
- (A) dull
 - (B) wonderful
 - (C) stunning
 - (D) beautiful

Direction : Rearrange the following alternatives to complete the below-mentioned sentence [Q. No. 20 – Q. No. 21].

20. She

- (i) danced with joy
- (ii) that she had topped
- (iii) when she found out
- (iv) the board examination

- (A) (i), (ii), (iii), (iv)
- (C) (i), (iii), (ii), (iv)

- (B) (i), (iv), (iii), (ii)
- (D) (i), (iii), (iv), (ii)

21. Famine means

- (i) nature in a
- (iii) general scarcity of food grains

- (A) (iv), (ii), (i), (iii)
- (C) (iii), (ii), (i), (iv)

- (ii) of an extreme
- (iv) particular part of country

- (B) (iv), (iii), (i), (ii)
- (D) (iii), (ii), (iv), (i)

Direction : The given sentence is in active / passive voice. change the voice of the sentence and select the correct option from the sentence below [Q. No. 22 – Q. No. 24].

22. My bicycle has been sold.

- (A) I have sold my bicycle.
- (C) They sold my bicycle.

- (B) I had sold my bicycle.
- (D) I sold my bicycle.

23. Keep your word.

- (A) Tell him to keep his word.
- (C) Your word was kept.

- (B) Your word should be kept.
- (D) Your word is kept.

24. Do you know him ?

(A) Are you known to him ?

(B) Are you known by him ?

(C) Was he known to you ?

(D) Is he known to you ?

Direction : Select the correct synonyms from the options given below [Q. No. 25 – Q. No. 28].

25. PLAGIARISM

(A) theft of fund

(B) Arson

(C) belief in God

(D) theft of ideas

26. PINNACLE

(A) taunt

(B) peak

(C) pan

(D) foothill

27. MEDIOCRE

(A) average

(B) mediaval

(C) industrial

(D) agricultural

28. TENACITY

(A) splendor

(B) ingratitude

(C) perseverance

(D) decimation

Direction : Choose the correct determiner [Q. No. 29 – Q. No. 33].

29. There is —— hope of his recovery, so his son comes to see him —— three days.

(A) a little, on

(B) little, on

(C) little, every

(D) little, each

30. She didn't remember —— title of —— first book that she had read.

(A) the, the

(B) the, a

(C) the, my

(D) a, the

31. I can speak —— French, so I understood —— parts of the speech.

(A) little, few

(B) a little, some

(C) some, little

(D) some, a little

32. During my walk in the park, I saw —— old woman wearing —— red hat.

(A) an, a

(B) the, a

(C) an, the

(D) on, the

33. —— members are valuable to us and —— is going to be given a present.

(A) a few, each

(B) some, each

(C) few, each

(D) all, each

Direction : Find the appropriate collective word [Q. No. 34 — Q. No. 36].

34. A ——— of rubbish.

(A) hedge

(B) heap

(C) pack

(D) packet

35. A ——— of arrows.

(A) quiver

(B) set

(C) cluster

(D) range

36. A ——— of clothes.

(A) pack

(B) packet

(C) outfit

(D) library

Direction : Choose the correct spelling [Q. No. 37 – Q. No. 40].

37. (A) rediculous

(B) ridiculus

(C) ridiculous

(D) ridiculus

38. (A) irrelevant

(B) irelevant

(C) irelevent

(D) irrelevent

39. (A) ocassion

(B) occasion

(C) occassion

(D) ocasion

40. (A) incriidulus (B) incredulus
(C) incredulous (D) incriidulous
41. To generate public awareness on the protection of the one-horned Rhino, the Assam Government has declared as 'RHINO DAY' on
(A) December, 22nd (B) October, 22nd
(C) November, 22nd (D) September, 22nd
42. Purnima Das Barman from Assam is well known for the conservation effort of which of the following species ?
(A) Pigmy Hog (B) Greater Adjutant stork
(C) Golden Langur (D) One horned Rhino
43. Which of the following river of Assam is known as the 'Kameng' of Arunachal Pradesh ?
(A) Jia Dhal (B) Jaji
(C) Subansiri (D) Jia Bharali
44. Which schedule of Indian Constitution deals with administration of tribal area in Assam ?
(A) Fourth (B) Fifth
(C) Sixth (D) Seventh

45. If the President and Vice-President of India both have resigned, who will act as the President ?
- (A) The Prime Minister
(B) The Chief Election Commissioner
(C) The Chief Justice of India
(D) None of the above
46. The Union Government aims to achieve objective of housing for all under PMAYG by
- (A) 2022 (B) 2021
(C) 2023 (D) 2024
47. The Assam Government has launched a 'campaign' with an aim to construct one lakh toilets across the State. What is its name ?
- (A) Mission Toilet
(B) Mission Sambhav
(C) Mission of open Defection Free Region
(D) None of the above
48. Who wrote the book 'Bhakti Ratnawali' ?
- (A) Madhabdeva (B) Madhab Kandali
(C) Hem Swarwati (D) Sankardeva
49. Who was the founder chief editor of the Assamese magazine 'PRANTIK' ?
- (A) Pradeep Baruah (B) Homen Borgohain
(C) None of (A), (B) and (D) (D) Bhabendra Nath Saikia

50. Which one of the following is the first film directed by Dr. Bhupen Hazarika ?
- (A) Bhaiti (B) Era Batar Sur
(C) Chik Mik Bijuli (D) Prati Dhvani
51. Who is the first Assamese woman to win International Gold Medal in sports?
- (A) Ankushita Bora
(B) Hima Das
(C) Monalisha Baruah Mehta
(D) None of them
52. On which date and year did GST become effective in India ?
- (A) 1st June, 2016 (B) 1st August, 2017
(C) 1st July, 2017 (D) 1st July, 2016
53. Finance Minister of India Nirmala Sitharaman announced which scheme for the poor amid coronavirus lockdown ?
- (A) Griha Kalyan Yojona
(B) Anna Purna Yojona
(C) Garib Kalyan Anna Yojona
(D) Annadatta Sampark Yojona
54. 'Ahimsa Param Dharma' is a Sanskrit phrase that was popularized by father of our nation Mahatma Gandhi. From which ancient scripture this phrase was taken ?
- (A) Mahabharat (B) Ramayana
(C) Mundaka Upanishad (D) Geeta

55. Assam's first daily English Newspaper 'The Assam Tribune' published in the year
- (A) 30th September, 1948 (B) 30th September, 1946
(C) 30th September, 1947 (D) 30th September, 1950
56. 'National Youth Day' or 'Yuva Divas' is celebrated on
- (A) 12th April (B) 12th February
(C) 12th January (D) 12th March
57. The theme for 'World Water Day' of the year 2020 is
- (A) Why waste water (B) Leaving one behind
(C) Nature for water (D) Water and climate change
58. In which year 'O Mor Aponar Desh' was officially adopted as the Assam's State song ?
- (A) 1937 (B) 1927
(C) 1947 (D) 1957
59. 'Faster, Higher, Stronger' is the motto of which international games event ?
- (A) Olympic
(B) FIFA World Cup
(C) World Athletics Championship
(D) Afro-Asian Games

60. India's first 'Plasma Bank' is inaugurated in which city ?
- (A) Chennai (B) Mumbai
(C) Delhi (D) None of these
61. The angle of elevation of the sun, when the length of the shadow of a tree 3 times the height of the tree, is :
- (A) 60 degree (B) 45 degree
(C) 30 degree (D) 90 degree
62. The average of 20 numbers is zero. Of them, at the most, how many numbers may be greater than zero ?
- (A) 19 (B) 1
(C) 10 (D) 0
63. Two students appeared at an examination. One of them secured 9 marks more than the other and his marks was 56% of the sum of their marks. The marks obtained by them are :
- (A) 39, 30 (B) 42, 33
(C) 41, 32 (D) 43, 34
64. A fruit seller had some apples. He sells 40% apples and still has 420 apples. Originally, he had :
- (A) 588 apples (B) 600 apples
(C) 672 apples (D) 700 apples

65. If $A = x\%$ of y and $B = y\%$ of x , then which of the following is true ?
- (A) A is smaller than B (B) A is greater than B
(C) None of these (D) A is equal to B
66. 3 pumps, working 8 hours a day, can empty a tank in 2 days. How many hours a day must 4 pumps work to empty the tank in 1 day ?
- (A) 9 (B) 12
(C) 11 (D) 10
67. 39 persons can repair a road in 12 days, working 5 hours a day. In how many days will 30 persons, working 6 hours a day, complete the work ?
- (A) 13 (B) 10
(C) 14 (D) 15
68. If a person walks at 14 km/hr instead of 10 km/hr, he would have walked 20 km more. The actual distance travelled by him is :
- (A) 70 km (B) 56 km
(C) 50 km (D) 80 km
69. A train can travel 50% faster than a car. Both start from point A at the same time and reach point B 75 kms away from A at the same time. On the way, however, the train lost about 12.5 minutes while stopping at the stations. The speed of the car is :
- (A) 100 kmph (B) 110 kmph
20 kmph (D) 130 kmph

70. If a person walks at 14 km/hr instead of 10 km/hr, he would have walked 20 km more. The actual distance travelled by him is :
- (A) 50 km (B) 56 km
(C) 70 km (D) 80 km
71. How much time will it take for an amount of 450 to yield 81 as interest at 4.5% per annum of simple interest ?
- (A) 3.5 years (B) 4 years
(C) 4.5 years (D) 5 years
72. Two numbers are respectively 20% and 50% more than a third number. The ratio of the two numbers is :
- (A) 2 : 5 (B) 3 : 5
(C) 6 : 7 (D) 4 : 5
73. The ratio of the number of boys and girls in a college is 7:8. If the percentage increase in the number of boys and girls be 20% and 10% respectively, what will be the new ratio ?
- (A) 8 : 9 (B) 17 : 18
(C) 21 : 22 (D) 20 : 22
74. What least number must be added to 1056, so that the sum is completely divisible by 23 ?
- (A) 2 (B) 3
(C) 18 (D) 21

75. The largest 4 digit number exactly divisible by 88 is :
- (A) 9944 (B) 9768
(C) 9988 (D) 8888
76. A boat can travel with a speed of 13 km/hr in still water. If the speed of the stream is 4 km/hr, find the time taken by the boat to go 68 km downstream.
- (A) 2 hours (B) 3 hours
(C) 4 hours (D) 5 hours
77. How many square metres is 36 square centimetres ?
- (A) 3.6 square metres (B) 360 square metres
(C) 0.0036 square metres (D) 0.036 square metres
78. The present age of Sahil's _____ times the present age of Sahil. After 5 years their ages will add to 66 years. Present ages (years) of Sahil and his mother are
- (A) 14, 42 (B) 18, 40
(C) 16, 38 (D) 15, 40
79. The ratio of incomes of two persons is 9 : 7 and the ratio of their expenditures is 4 : 3. If each of them manages to save Rs. 2,000 per month, their monthly incomes are
- (A) Rs. 27,000 and Rs. 21,000
(B) Rs. 18,000 and Rs. 14,000
(C) Rs. 36,000 and Rs. 28,000
(D) Rs. 45,000 and Rs. 35,000

80. In a flower bed, there are 23 rose plants in the first row, 21 in the second, 19 in the third, and so on. There are 5 rose plants in the last row. The number of rows in the flower bed are
- (A) 8 (B) 13
(C) 12 (D) 10
81. Wi-Fi stands for
- (A) Wireless Fidelity (B) None of these
(C) Wiring Fidelity (D) Wireless File
82. Which part of TCP/IP is responsible for breaking up data into small pieces at the source ?
- (A) IP (B) TCP
(C) Both (A) and (B) (D) None of these
83. The Bcc option in e-mail message is used to
- (A) send the same message to several people at the same time without letting them know that others have also received the same message
(B) add the address of the recipient
(C) to attach document to the message
(D) add the address of the sender IP
84. The data type is used to create a clickable link to a web page, file, or email address.
- (A) Lookup Wizard (B) OLE Object
(C) Hyperlink (D) Memo

85. The first graphical Web browser was
- (A) Mozilla Firefox (B) Internet Explorer
(C) NCSA Mosaic (D) Opera
86. Full form of GIF is
- (A) Graphics Interchange Format (B) Graphics Image Format
(C) Graphics Inter Format (D) Graphics Information Format
87. LINK, VLINK, and ALINK are the attributes of which tag ?
- (A) HEAD (B) HTML
(C) BODY (D) None of these
88. DNS in internet technology stands for
- (A) Distributed Name System
(B) Data Name System
(C) Dynamic Name System
(D) Domain Name System
89. What dose the SMTP in a SMTP server stand for ?
- (A) Simple Mail Transfer Protocol
(B) Serve Message Text Protocol
(C) Short Messaging Text Process
(D) Short Messaging Transfer Protocol

90. USB stands for

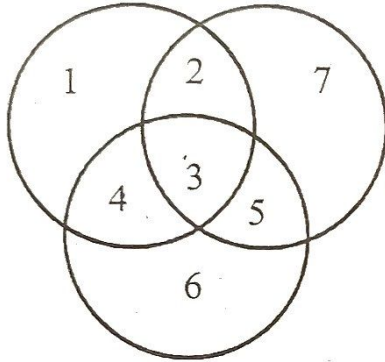
(A) Universal Sequential Bus

(B) Universal Serial Bus

(C) Unique Serial Bus

(D) Unique Sequential Bus

91. In the given figure, circles represent students studying in different subjects. How many students study all the three subjects ?



(A) 3

(B) 2

(C) 4

(D) 1

92. After walking 10m, Shankar turned left and covered a distance of 6m then turned right and covered a distance of 20m. In the end he was moving towards the south. From which direction did Shankar start his journey ?

(A) West

(B) South

(C) North

(D) East

93. Six friends are sitting in a circle and playing cards. Kenny is to the left of Danny. Michael is in between Bobby and Johnny. Roger is in between Kenny and Bobby. Who is sitting to the right of Michael ?

(A) Danny

(B) Johnny

(C) Bobby

(D) Kenny

94. Find the odd one

(A) 357

(B) 345

(C) 246

(D) 123

95. Anita and Geeta are experts in dancing and music. Seeta and Geeta are expert in music and painting. Anita and Neeta are expert in debate and dancing. Neeta and Seeta are expert in painting and debate. Which girl is not expert in painting?

(A) Seeta only

Anita only

(C) Anita and Geeta

(D) Neeta

96. In a family there are several brothers and sisters. Every 2 boys have brothers as many as sisters and each girl has 2 brothers less than twice as many brothers as sisters. Now find the number of boys and girls.

(A) 12, 10

(B) 6, 4

(C) 6, 8

(D) 8, 6

97. Two bus tickets from city P to Q and three tickets from city P to R costs Rs. 77 but three tickets from city P to Q and two tickets from city P to R cost Rs. 73. What are the fares of cities Q and R from P?

(A) Rs.13, Rs.17

(B) Rs.17, Rs.13

(C) Rs.15, Rs.14

(D) Rs.4, Rs.23

98. P, Q and R are intelligent, P, S and T are laborious and S, R and T are honest and P, Q and T are ambitious. Which of the following are not honest?




(A) R and P

(B) P and Q

(C) P and S

(D) R, P and Q

99. Which of the given figures best represents the relationship of Elected body, Members of Parliament and Members of Legislative Assembly ?



100. Choose the related word out of the given option below :

Blood : Circulation :: Hormone : ?

(A) Digestion

(B) Control

(C) Coordination

(D) Excretion.